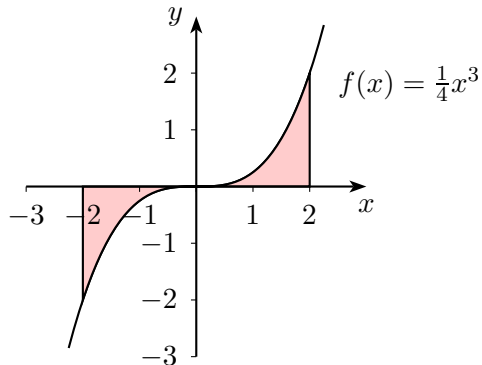


FOS 12c — Lösungen zu bestimmten Integralen

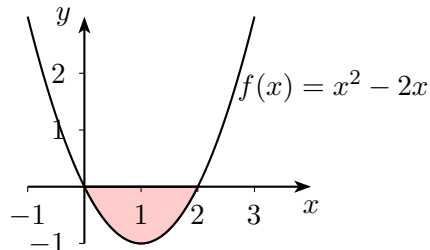
Datum

Flächen — LÖSUNGEN

11. Februar 2009

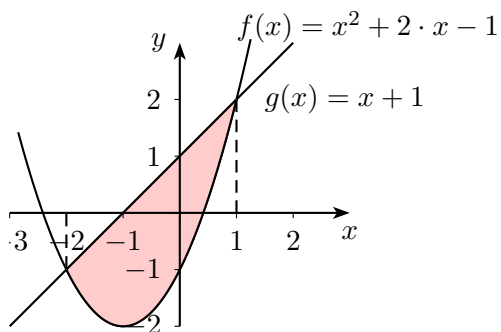


$$A = 2 \cdot \left[\frac{1}{16} x^4 \right]_0^2 = 2$$



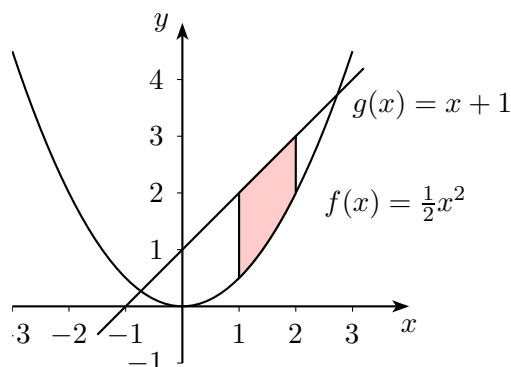
Nullstellen bei $x_1 = 0$ und $x_2 = 2$,

$$A = - \int_0^2 f = \left[x^2 - \frac{x^3}{3} \right]_0^2 = \frac{4}{3} \approx 1,33.$$



Schnittpunkte der beiden Funktionen bei $x = -2$ und $x = 1$.

$$A = \int_{-2}^1 (g(x) - f(x)) dx = \left[\frac{x^2}{2} + x - \left(\frac{x^3}{3} + x^2 - x \right) \right]_{-2}^1 = 4\frac{1}{2} = 4,5$$



$$A = \int_1^2 (g - f) = \frac{4}{3} \approx 1,33.$$